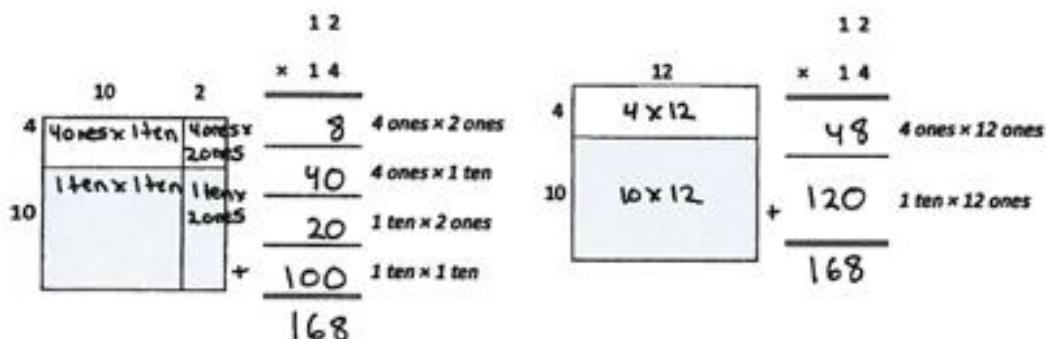
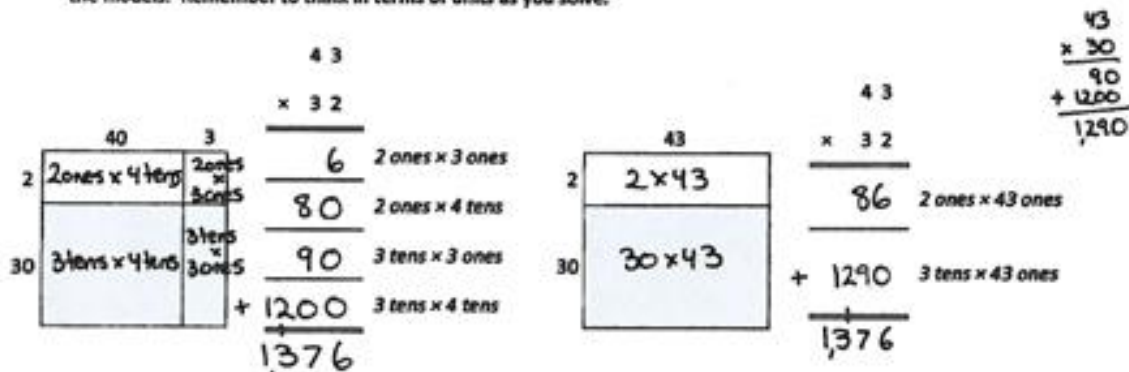


Name Jack Date _____

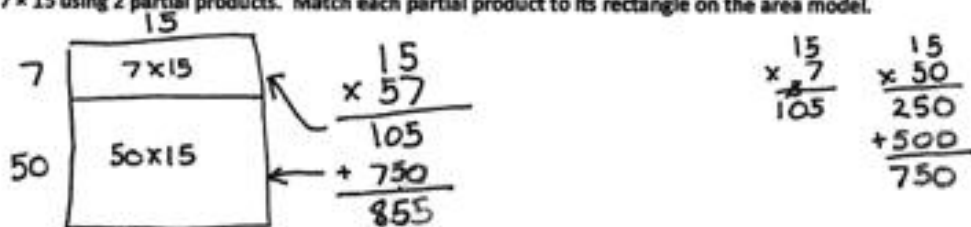
1. Solve 14×12 using 4 partial products and 2 partial products. Remember to think in terms of units as you solve. Write an expression to find the area of each smaller rectangle in the area model.



2. Solve 32×43 using 4 partial products and 2 partial products. Match each partial product to its area on the models. Remember to think in terms of units as you solve.



3. Solve 57×15 using 2 partial products. Match each partial product to its rectangle on the area model.



4. Solve the following using 2 partial products. Visualize the area model to help you.

